

Name: _____

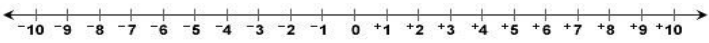
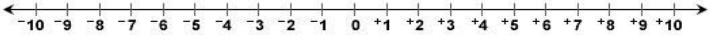
Homework – Monday (September 12, 2016)

Solve the following problems **without a calculator**. You ***MUST*** show your work. ***NO WORK = NO CREDIT.***

1. Describe the difference between positive and negative values. Draw an image to support your explanation.	2. If you deposit \$36 dollars, withdraw \$10 dollars and deposit \$4 dollars, how much money is in the account?
3. If the temperature started at 12 degrees and drops 2 degrees every hour. What is the temperature after 6 hours.	4. List four sets of zero pairs using two digit values.

Homework- Tuesday (September 13, 2016)

Solve the following problems **without a calculator**. You ***MUST*** show your work. ***NO WORK = NO CREDIT.***

1. Describe what happens when we add a number and it's opposite. Use a visual to justify your response.	2. If the temperature is -12 degrees and rises to 22 degrees, what is the difference in the temperatures.
3. Draw a number line to represent the numeric expression. $-5 + 4 =$  $-5 - 4 =$ 	4. Use counters to represent the following: $-5 + 4 =$ $-5 - 4 =$

Name: _____

Homework - Wednesday (September 14, 2016)

Solve the following problems **without a calculator**. You ***MUST*** show your work. ***NO WORK = NO CREDIT.***

1. Describe what happens when we add a negative number and another negative value.

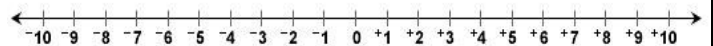
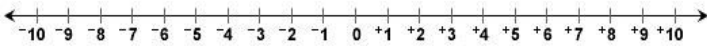
2. If the temperature is -50 degrees and rises to 20 degrees, what is the difference in the temperatures.

3. Use the number line to represent the numeric expression.

4. Use the number line to represent the numeric expression.

$$-6 + 10 =$$

$$-6 - 10 =$$



Homework - Thursday (September 15, 2016)

Solve the following problems **without a calculator**. You ***MUST*** show your work. ***NO WORK = NO CREDIT.***

1. If your account has a negative balance of \$75 and you deposit \$125, how much money remains in the account.

2. If the temperature is 25 degrees and drops 50 degrees, what is the difference in the temperatures.

3. Use the number line to represent the numeric expression.

4. Use the number line to represent a numeric expression.

$$-7 + 2 =$$

$$-7 - 2 =$$

